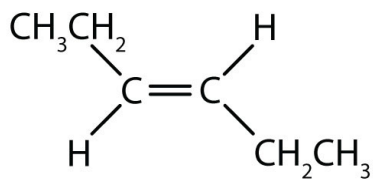


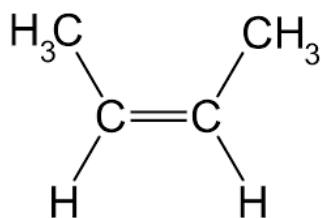
Chemistry 11  
**Organic Chemistry II Check Point**  
✓ Naming & Drawing Isomers

Name:  
Date:  
Block:

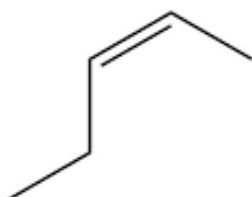
Name the following isomers:



---



---



---

Draw the following isomers:

isomers of butane (hint: there should be two)

cis-4-methyl-2-pentene

trans-3-hexene

**Organic Chemistry II Check Point**

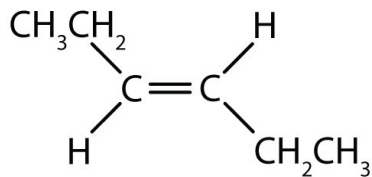
✓ Naming &amp; Drawing Isomers

Name:

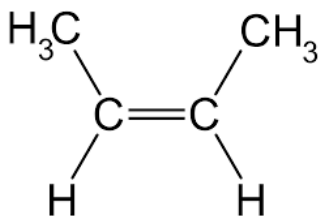
Date:

Block:

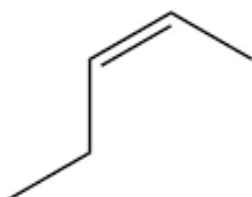
Name the following isomers:



---



---



---

Draw the following isomers:

isomers of butane (hint: there should be two)

cis-4-methyl-2-pentene

trans-3-hexene