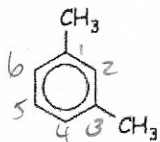
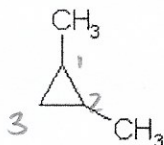
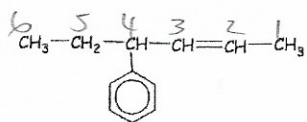
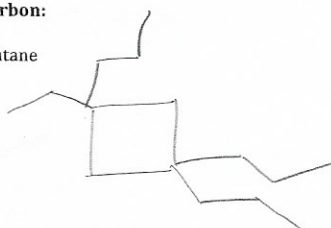


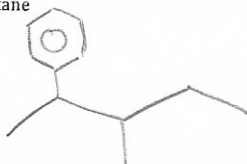
Name the following hydrocarbon:

1,3-dimethylbenzene1,2-dimethylcyclopropane4-phenyl-2-hexene

Draw the following hydrocarbon:

3/ ^{1,1,3} 1-ethyl-1,3,3-tripropylcyclobutane

3-methyl-2-phenylpentane



1-ethyl-3-methylbenzene

